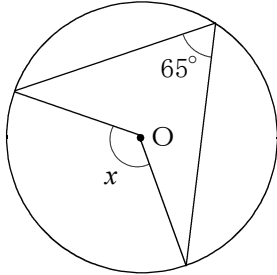


<A1>

組	番	名前

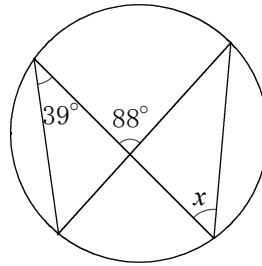
1 次の(1)~(6)の図で、 $\angle x$ の大きさを求めなさい。

(1)



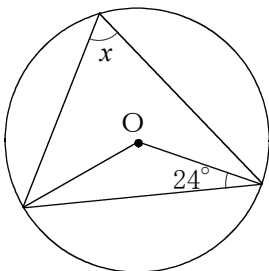
(1)	
-----	--

(2)



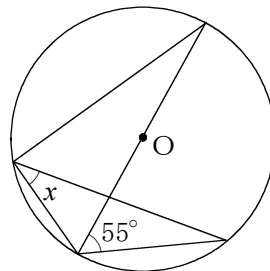
(2)	
-----	--

(3)



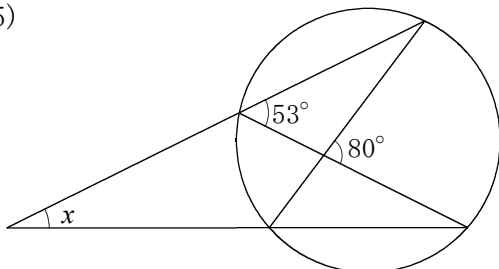
(3)	
-----	--

(4)



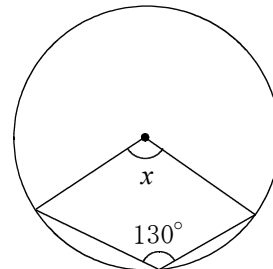
(4)	
-----	--

(5)



(5)	
-----	--

(6)



(6)	
-----	--

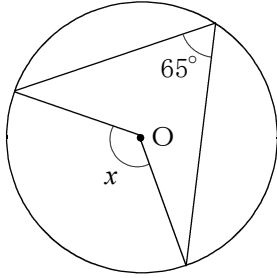
<円①>

解 答

組	番	名前

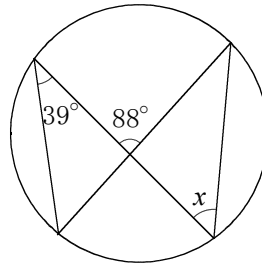
1 次の(1)～(6)の図で、 $\angle x$ の大きさを求めなさい。

(1)



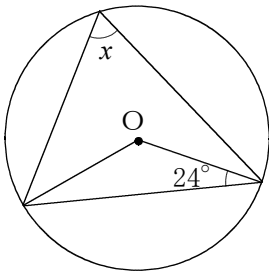
(1)	130°
-----	-------------

(2)



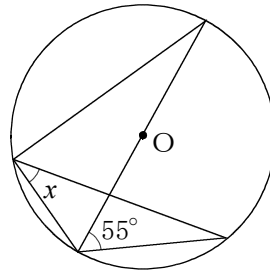
(2)	49°
-----	------------

(3)



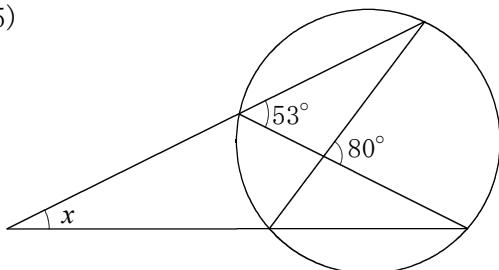
(3)	66°
-----	------------

(4)



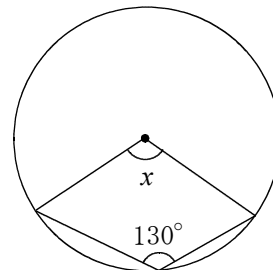
(4)	35°
-----	------------

(5)



(5)	26°
-----	------------

(6)



(6)	100°
-----	-------------