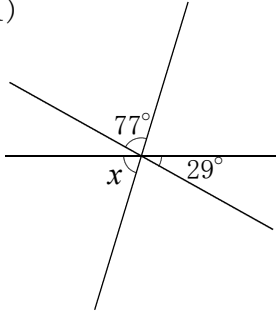


<平行と合同①>

組	番	名前

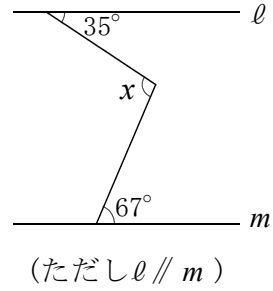
1 次の(1)～(4)の $\angle x$ の大きさを求めなさい。

(1)



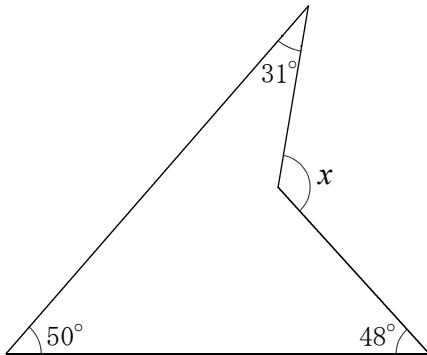
(1)		°
-----	--	---

(2)



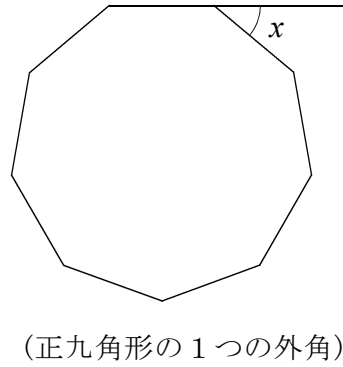
(2)		°
-----	--	---

(3)



(3)		°
-----	--	---

(4)



(4)		°
-----	--	---

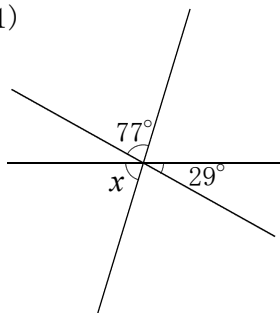
<平行と合同①>

解 答

組	番	名前

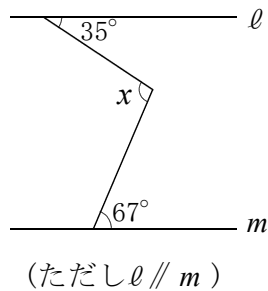
1 次の(1)～(4)の $\angle x$ の大きさを求めなさい。

(1)



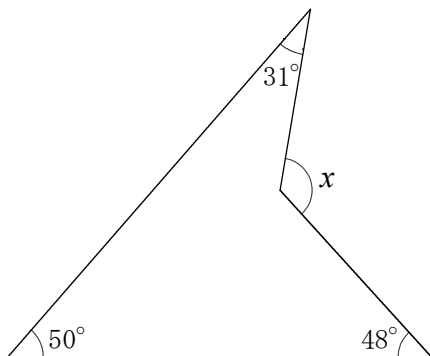
(1)	74°
-----	-----

(2)



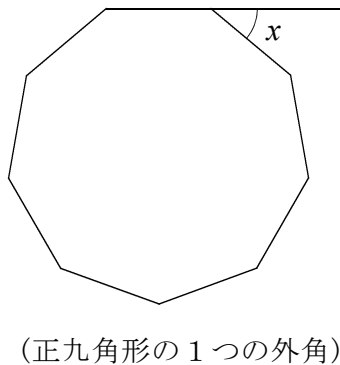
(2)	102°
-----	------

(3)



(3)	129°
-----	------

(4)



(4)	40°
-----	-----